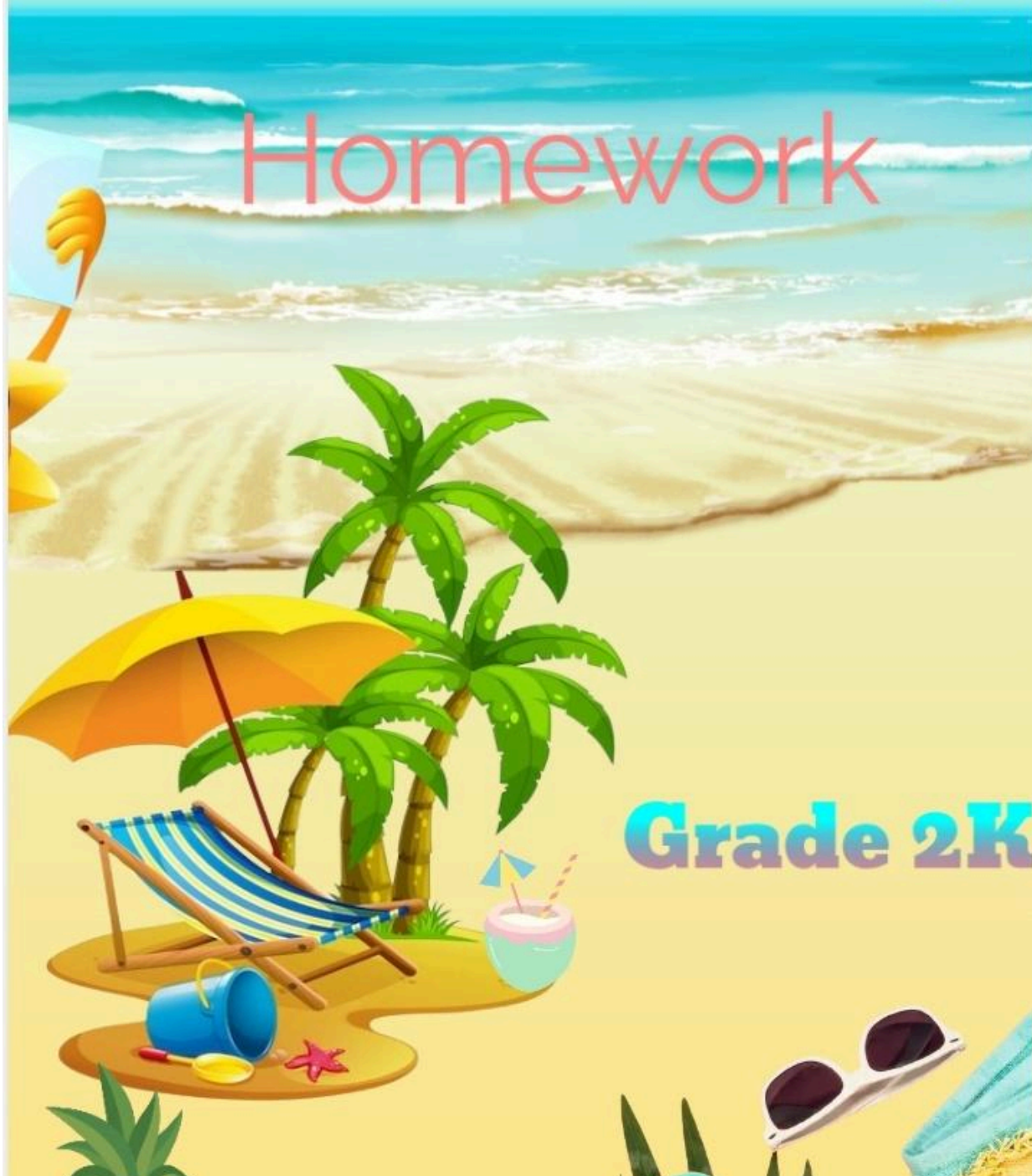




GURU HAR RAI SCHOOL

Summer holiday

Homework



Grade 2K



SUMMER

★ ASSIGNMENT ★



Dear Parent, ♥



The summer break is a great opportunity for children to relax, enjoy, and explore learning beyond the classroom. ★



We have prepared a set of fun, simple, and creative activities for your child to do during the holidays. ♥



Please encourage your child to complete these tasks with interest and joy. ★

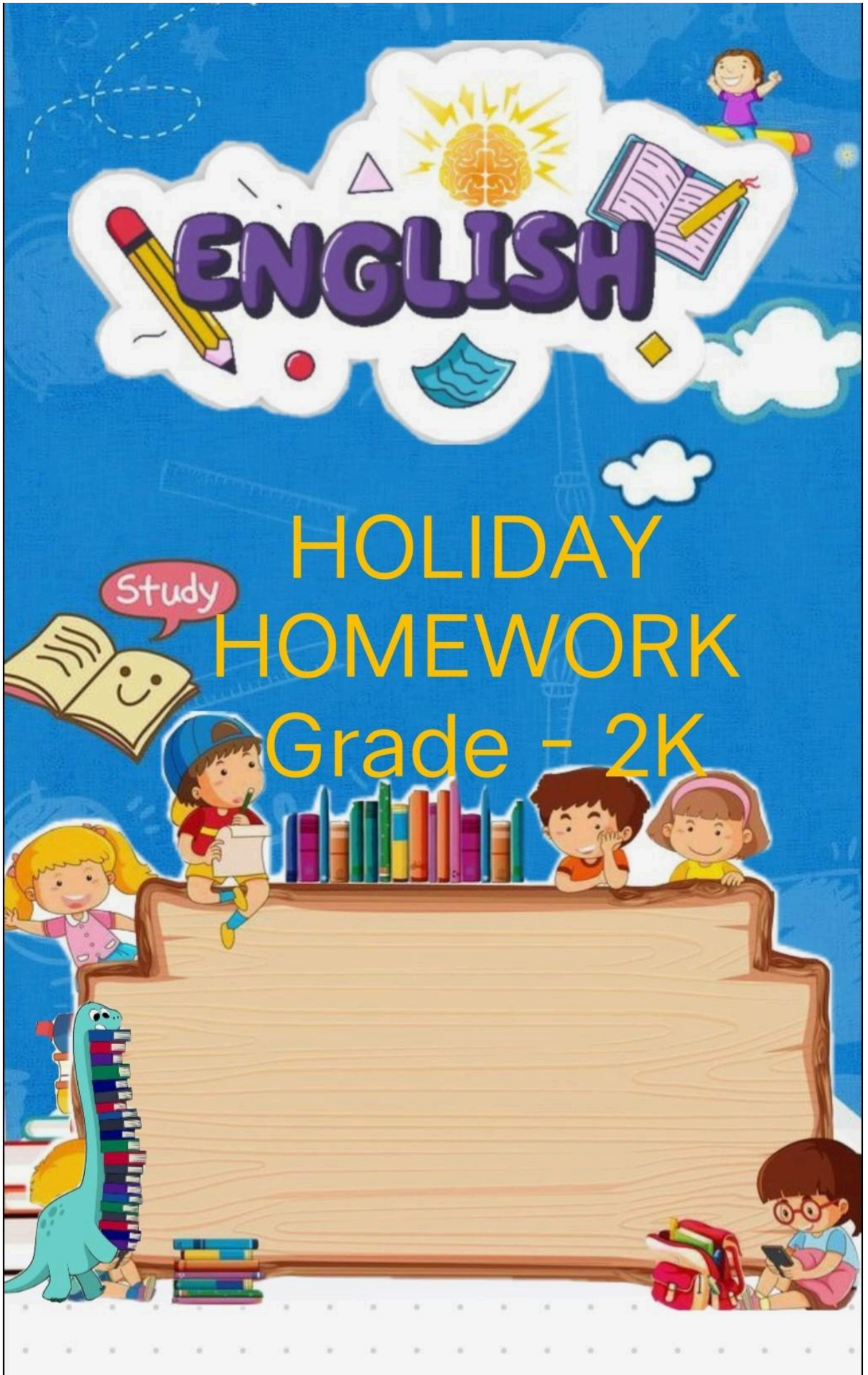


Let us make learning fun this summer! ♥



Let us make this summer full of fun, learning, and happiness! ♥





ENGLISH

HOLIDAY HOMEWORK Grade - 2K

Study



Myself



My Name: _____

★ Kids Worksheets Hub

My Age: _____

I am years old

I Am In: _____



Grade / Class



My Favorite Color: _____



I Am Good At: _____



★ My Family: _____

Draw My Family


























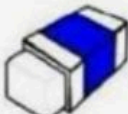
My Favorite Food: _____



When I Grow Up
I Want To Be: _____



a / an

- | | | | | | | | |
|----|---|-------|------------|----|--|-------|---------|
| 1 |  | | orange | 13 |  | | igloo |
| 2 |  | | apple | 14 |  | | giraffe |
| 3 |  | | umbrella | 15 |  | | banana |
| 4 |  | | rabbit | 16 |  | | uncle |
| 5 |  | | bus | 17 |  | | flower |
| 6 |  | | university | 18 |  | | ear |
| 7 |  | | desk | 19 |  | | bear |
| 8 |  | | elephant | 20 |  | | ring |
| 9 |  | | sheep | 21 |  | | arm |
| 10 |  | | lemon | 22 |  | | farmer |
| 11 |  | | egg | 23 |  | | eye |
| 12 |  | | uniform | 24 |  | | eraser |

Fill in the blank space with **a** or **an**

a

an


1. It is ___ **cat**.



2. It is ___ **hen**.



3. It is ___ **elephant**.



4. It is ___ **dog**.

5. It is ___ **owl**.



6. It is ___ **tiger**.

7. It is ___ **octopus**.



8. It is ___ **giraffe**.

9. It is ___ **panda**.



10. It is ___ **deer**.

ARTICLES: A, AN OR THE

Exercises

Circle the best article .

1. She is reading **a / an / the** book about space travel.
2. Can you open **a / an / the** window? It's very hot in here.
3. I have **a / an / the** idea for our project.
4. **A / An / The** moon looks beautiful tonight.
5. He is eating **a / an / the** orange.
6. I need **a / an / the** pencil to write my homework.
7. We visited **a / an / the** zoo on Saturday.
8. There is **a / an / the** old castle near the village.
9. She is wearing **a / an / the** uniform to school today.
10. I saw **a / an / the** owl in the tree.
11. Please give me **a / an / the** glass of water.
12. **A / An / The** Eiffel Tower is in Paris.
13. He is **a / an / the** honest man.
14. We watched **a / an / the** movie last night.
15. I want to buy **a / an / the** new phone.
16. There is **a / an / the** ant on the table.
17. She has **a / an / the** umbrella in her bag.
18. I am learning to play **a / an / the** guitar.
19. My dad is **a / an / the teacher** at the local school.
20. I have **a / an / the** hour to finish my homework.



Fish Out of Water



Read the short story and answer the questions!

My friends and I went to the park.

The park had a lake, We saw a little orange fish.

It had gotten out of the water. My friends and I helped put the fish back in the water.

1. Where did the friends go?

2. What did the park have?

3. What color was the fish?

4. Where did they put the fish?

5. Do you have pet fish?

Picture Composition

Directions: Look at the picture carefully. Write 5–8 sentences about it.

Title: _____



Write Here: _____

Questions to Help You:

- Where are the children?
- What are they doing?
- How is the weather?
- Why do people like parks?

FUN ENGLISH SUMMER ADVENTURES!



1. Vocabulary Picnic

Go on a "Word Hunt" during a family meal or picnic.
Task: Identify and write down the names of at least 10 different food items or objects you see.
Goal: Build your vocabulary by labeling everyday things in English.



2. Storybook Star

Read one short storybook of your choice.
Task: Draw your favorite character and write three simple sentences describing them.
Goal: Improve reading comprehension and creative writing skills.



3. Alphabet Scavenger Hunt

Find one object in your house for every letter from A to J.
Task: Make a list of these objects (e.g., A for Apple, B for Bed).
Goal: Practice letter-sound association and spelling in a fun way.



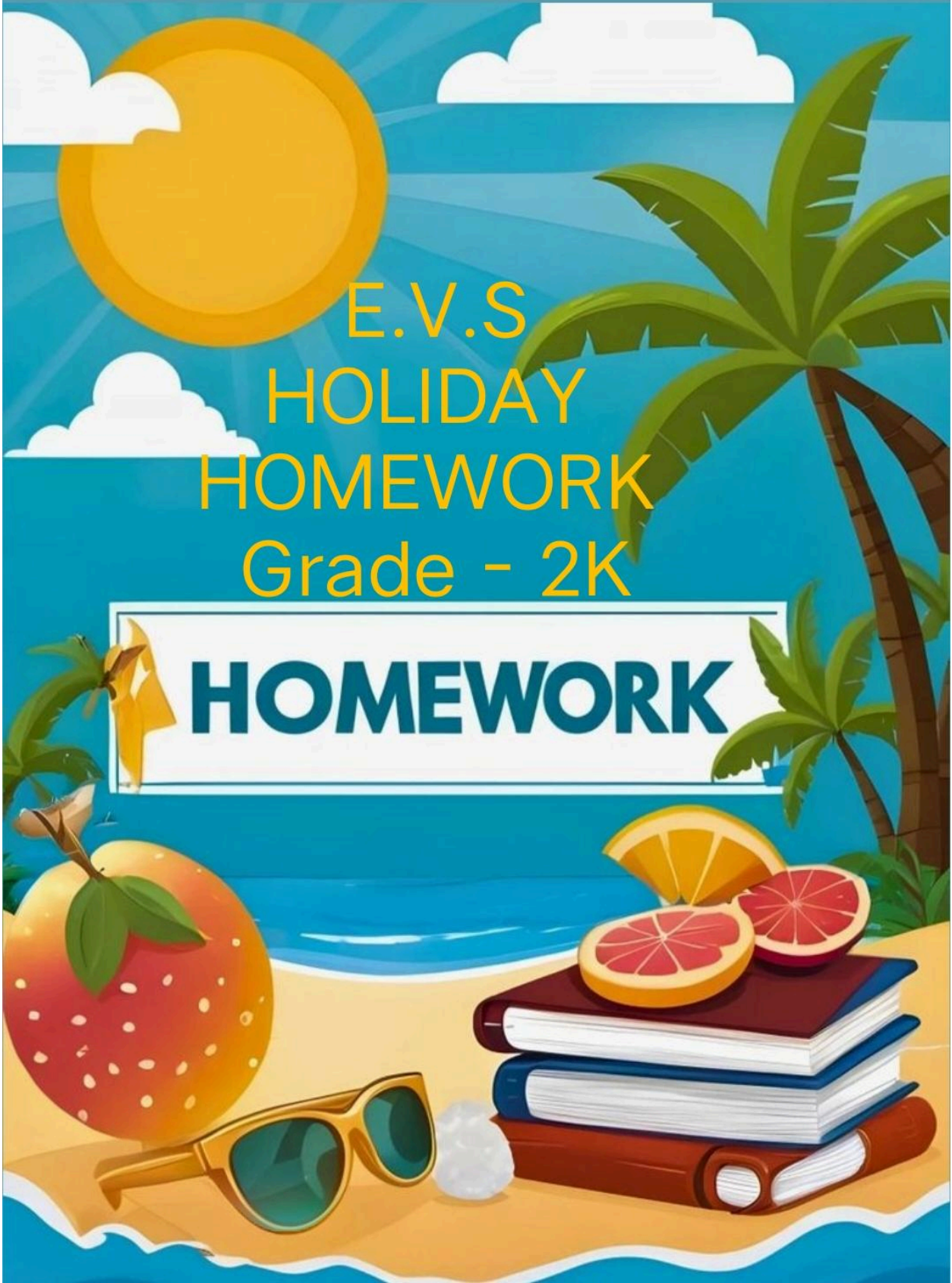
4. Summer Diary

Keep a mini-diary for one week.
Task: Every day, write one sentence about the most fun thing you did.
Goal: Develop a habit of daily writing and expressing thoughts.



5. Poetry Corner


Learn and recite a simple four-line English poem about summer or nature.
Task: Record a short video of yourself reciting it or perform it for your family.
Goal: Enhance speaking skills, pronunciation, and confidence.



E.V.S
HOLIDAY
HOMEWORK
Grade - 2K

HOMEWORK

THE BODY



HAND

HAIR

KNEE

ARM

EAR

FOOT

NOSE

EYE

LEG

MOUTH

Write the name of sense organ

I can smell with my

.....



I can see with my

.....



I can hear with my

.....



I can touch with my

.....



I can taste with my

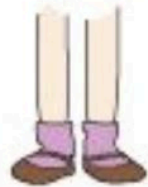
.....



My Body

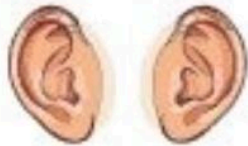
Complete the sentences.

I have _____ eyes.



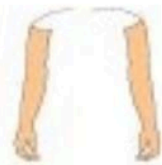
I have _____ legs.

I have _____ nose.



I have _____ ears.

I have _____ arms.



I have _____ tongue.

I have _____ head.



I have _____ toes.

I have _____ mouth.



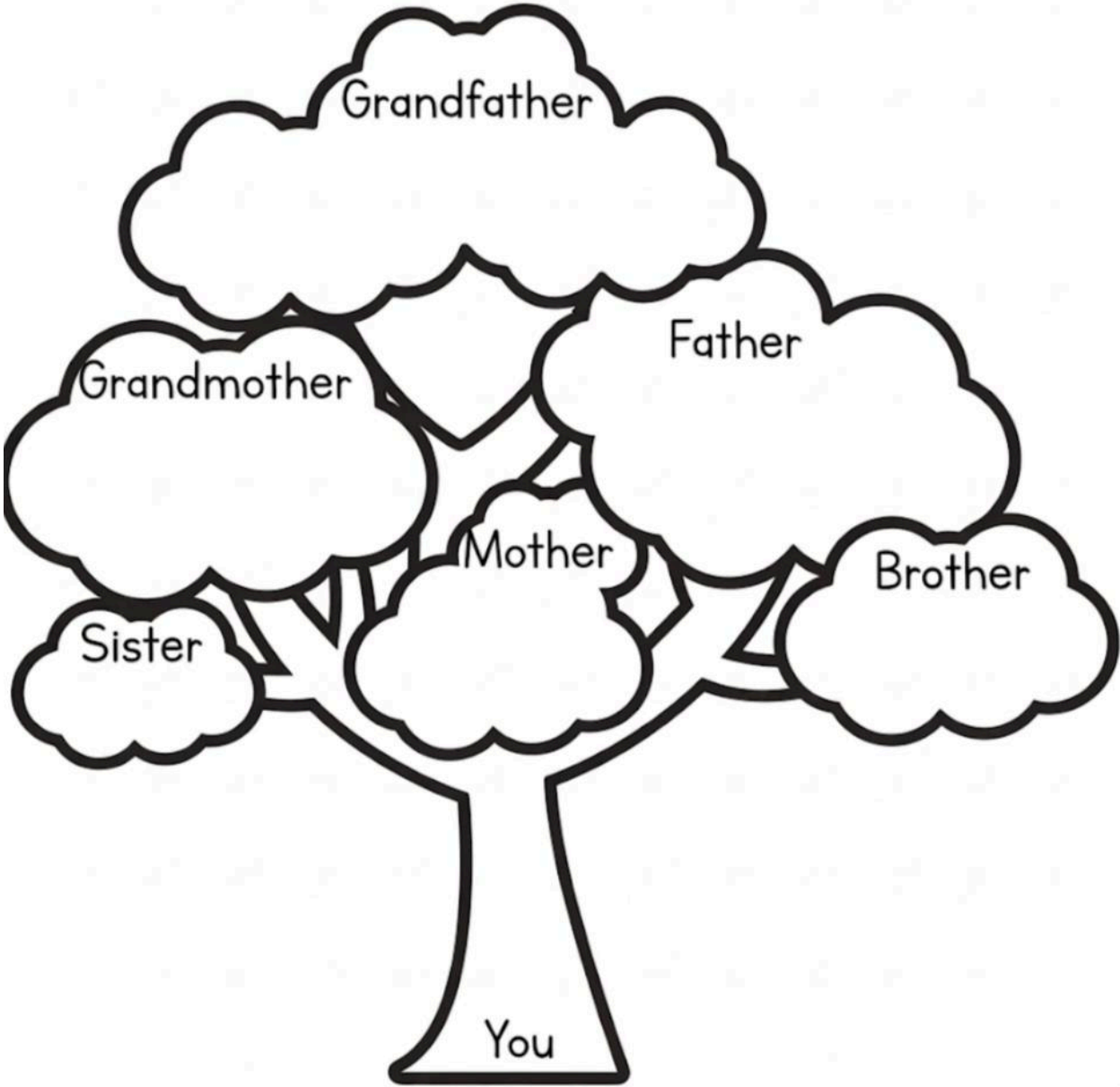
I have _____ fingers.

Let's fill the blank!

1. I use my _____ to see.
2. I use my _____ to walk.
3. I smell with my _____.
4. I hold things with my _____.
5. I hear sounds with my _____.
6. I use my _____ to taste food.
7. My _____ helps me bend my arm.
8. I clap with my _____.
9. I kick a ball with my _____.
10. I wear shoes on my _____.
11. My _____ helps me chew food.
12. I wave hello with my _____.
13. I brush my _____ every morning.
14. My _____ helps me think.
15. I wiggle my _____ when I'm happy.


My Family Tree

Write the names of your family members.



FAMILY MEMBERS

Look at the picture and write the name of the family member bellow!



Keywords

- Grandfather
- Grandmother
- Father
- Mother
- Brother
- Sister
- Cousin
- Uncle
- Aunt

Activities **Inside** or **Outside**.

- Drag and Drop in the correct category.

Inside 

Outside 



Read books



Ride a bike



Throw the ball



Fly a kite



Play soccer



Do puzzles



Play baseball



Draw pictures



Play with dolls



Play with blocks.



Play with my pets

Tick the correct option.



- football
 golf
 volleyball



- badminton
 running
 diving



- boxing
 cycling
 tennis



- golf
 surfing
 gymnastics



- bowling
 volleyball
 basketball




- swimming
 surfing
 skiing



- tennis
 running
 cycling



- football
 basketball
 volleyball



- golf
 baseball
 running



- boxing
 baseball
 karate



- running
 surfing
 cycling



- diving
 cycling
 running



- rock climbing
 cycling
 swimming



- boxing
 karate
 gymnastics



- karate
 boxing
 running



- cycling
 ice skating
 surfing



- swimming
 diving
 skiing




- skiing
 surfing
 cycling



BANANA



APPLE



LEMON




ORANGE



TOMATO

I	A	Z	B	Y	H	W	S	I	I	L	O
S	P	C	A	R	R	O	T	Z	A	O	V
G	Q	Y	N	L	A	O	O	G	G	E	I
S	J	Z	A	I	I	E	M	N	F	D	Z
M	R	F	N	M	E	G	A	P	P	L	E
I	T	Q	A	L	P	O	T	A	T	O	Z
Z	S	S	I	V	E	L	O	U	Q	R	G
E	L	G	Z	E	A	L	G	M	L	A	S
P	E	P	P	E	R	Z	N	M	I	N	Q
G	M	M	G	R	P	S	F	Q	U	G	I
E	O	Q	L	S	I	Q	I	T	M	E	E
Z	N	I	S	F	M	O	L	S	N	I	S



PEAR



CARROT



POTATO



PEPPER

Healthy or unhealthy?

Identify each food item and circle the correct option.

	Healthy
	Unhealthy


	Healthy
	Unhealthy


	Healthy
	Unhealthy

	Healthy
	Unhealthy


	Healthy
	Unhealthy

	Healthy
	Unhealthy

	Healthy
	Unhealthy

	Healthy
	Unhealthy

	Healthy
	Unhealthy

	Healthy
	Unhealthy

	Healthy
	Unhealthy


	Healthy
	Unhealthy

	Healthy
	Unhealthy

	Healthy
	Unhealthy

	Healthy
	Unhealthy

	Healthy
	Unhealthy

	Healthy
	Unhealthy

	Healthy
	Unhealthy

Fruits Crossword

DIRECTIONS: Fill in the crossword puzzle grid with the name of each fruit following the numbers and direction indicated. Use the word bank if you get stuck.

11 →

15 →

16 →

17 →

1 ↓

2 ↓

3 →

4 ↓

5 →

6 →

7 ↓

8 →

9 →

10 ↓

12 ↓

13 ↓

14 ↓

1 ↓

2 ↓

3 →

4 ↓

5 →

6 →

7 ↓

8 →

9 →

10 ↓

12 ↓

13 ↓

14 ↓

11 →

15 →

16 →

17 →

APPLE	KIWI
APRICOT	LEMON
AVOCADO	ORANGE
BANANAS	PEAR
BLACKBERRY	PINEAPPLE
CHERRIES	RASPBERRY
COCONUT	STRAWBERRY
GRAPEFRUIT	WATERMELON
GRAPES	



GURU HAR RAI SCHOOL

FUN EVS SUMMER ACTIVITIES LISTS

1. Little Green Thumb



पौधे उगाओ, पानी दो!

Grow a small plant (e.g., from mustard seeds) in a recycled container. Draw its growth weekly in your scrapbook.

2. Water Saver Champion



Take a "Save Water" pledge! Use a bucket for a bath instead of a shower. Turn off the tap when brushing. Keep a checklist.

3. Community Helpers Walk




Walk around your neighborhood. Observe five people who help us (like a doctor, postman, gardener). Draw them!

4. Bird Watcher Cafe



Put a water bowl and grains for birds on your balcony or terrace. Count how many different birds visit. Give them Hindi names!

5. Nature Explorer



Collect and paste five different kinds of leaves and twigs in your scrapbook. Note their shapes and colors.



Make Summer
Learning Fun!

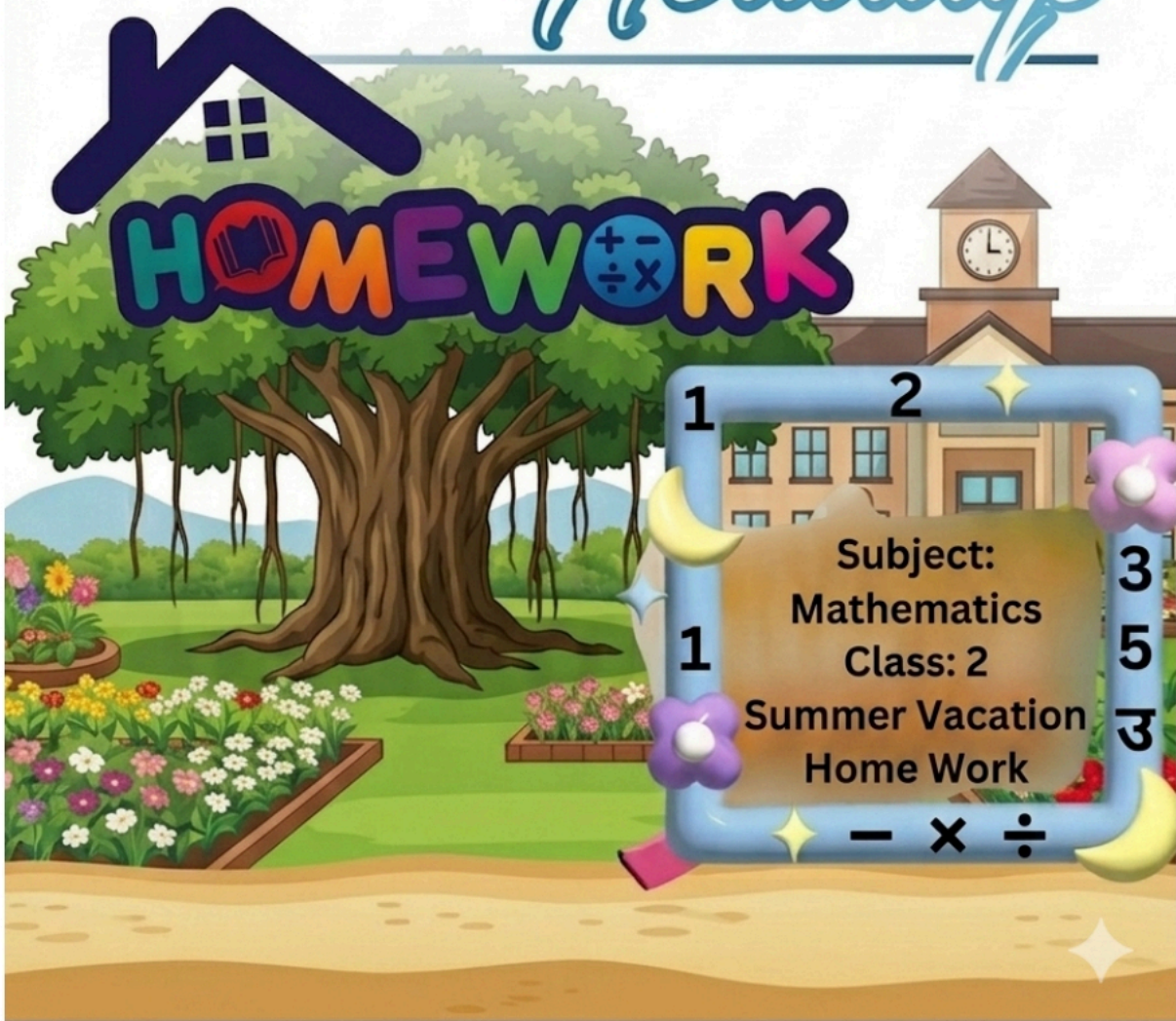
Grade-2K



GURU HAR RAI SCHOOL

MATHS

Holidays




HOMEWORK

1 2 3
1 5 3
Subject:
Mathematics
Class: 2
Summer Vacation
Home Work
- x ÷

Problem-solving

Do I add (+) or subtract (-)? Write each number sentence.


1.  A farmer had 8 chickens.
She bought 7 more.
How many chickens had she then?

+ or -
 $8 + \square = \square$

2. There were 10 birds on a line.
4 birds flew away.
How many birds are on the line now?



+ or -
 $\square \square = \square$


3.  Cian had 14c.
He bought an orange.
How much had he left?

+ or -
 $\square c \square c = \square c$

4. Sofia had 9 balloons.
She bought 6 more.
How many balloons has she now?



+ or -
 $\square \square = \square$


5.  Ali has 14 books.
Amar has 8 books.
How many more books has Ali than Amar?

+ or -
 $\square \square = \square$

6. Anita had 15 eggs.
She broke 7 of them.
How many eggs were not broken?



+ or -
 $\square \square = \square$


7.  Rowan had 17 pears.
He ate 9 of them.
How many pears had he left?


+ or -
 $\square \square = \square$


8. Simona had 19c.
She bought a yoghurt.
How much had she left?





+ or -
 $\square c \square c = \square c$


 $\square + \square + \square = \square$


 $\square + \square + \square = \square$


 $\square + \square + \square = \square$








 $\square + \square + \square = \square$




 $\square + \square + \square = \square$




 $\square + \square + \square = \square$




 $\square + \square + \square = \square$




 $\square + \square + \square = \square$




						
1	3	4	5	6	7	8




 +  +  =? Przykład 4+6+3=13




 +  +  =?




 +  +  =?

 +  +  =?

 +  +  =?

 +  +  =?

 +  +  =?

 +  +  =?

DIRECTIONS: FOLLOWING THE EXAMPLE, WRITE THE EXPANDED FORM OF THE FOLLOWING NUMBERS.

345	$300 + 40 + 5$
137	
246	
791	
582	
414	
653	
829	
968	





Order the following numbers from greatest to smallest

567 765 756 657  765 756 657 567

342 243 324 432 

178 187 871 817 

808 809 811 810 

217 216 218 251 

450 550 560 650 

422 244 242 424 

387 378 783 873 

889 898 998 988 

543 453 435 534 

Compare the numbers. Write the correct symbol.
Less than $<$, Greater than $>$, or equal $=$ to.



100 $>$ 90	380 \bigcirc 380
731 \bigcirc 644	101 \bigcirc 110
530 \bigcirc 523	46 \bigcirc 360
898 \bigcirc 998	753 \bigcirc 752
675 \bigcirc 657	611 \bigcirc 590
156 \bigcirc 266	500 \bigcirc 500
257 \bigcirc 157	180 \bigcirc 210

3 Digit Addition & Subtraction

$$\begin{array}{r} 235 \\ +234 \\ \hline \end{array} \quad \begin{array}{r} 567 \\ -468 \\ \hline \end{array} \quad \begin{array}{r} 578 \\ +568 \\ \hline \end{array}$$

$$\begin{array}{r} 978 \\ -456 \\ \hline \end{array} \quad \begin{array}{r} 857 \\ -467 \\ \hline \end{array} \quad \begin{array}{r} 678 \\ +564 \\ \hline \end{array}$$

$$\begin{array}{r} 956 \\ +567 \\ \hline \end{array} \quad \begin{array}{r} 456 \\ -345 \\ \hline \end{array} \quad \begin{array}{r} 867 \\ +345 \\ \hline \end{array}$$

$$\begin{array}{r} 544 \\ -243 \\ \hline \end{array} \quad \begin{array}{r} 345 \\ +345 \\ \hline \end{array} \quad \begin{array}{r} 898 \\ -568 \\ \hline \end{array}$$



Subtraction

without Regrouping

1)
$$\begin{array}{r} 38 \\ -25 \\ \hline \end{array}$$

2)
$$\begin{array}{r} 65 \\ -33 \\ \hline \end{array}$$

3)
$$\begin{array}{r} 79 \\ -63 \\ \hline \end{array}$$

4)
$$\begin{array}{r} 88 \\ -72 \\ \hline \end{array}$$

5)
$$\begin{array}{r} 29 \\ -12 \\ \hline \end{array}$$

6)
$$\begin{array}{r} 58 \\ -46 \\ \hline \end{array}$$

7)
$$\begin{array}{r} 96 \\ -75 \\ \hline \end{array}$$

8)
$$\begin{array}{r} 53 \\ -21 \\ \hline \end{array}$$

9)
$$\begin{array}{r} 67 \\ -42 \\ \hline \end{array}$$

10)
$$\begin{array}{r} 47 \\ -16 \\ \hline \end{array}$$

11)
$$\begin{array}{r} 52 \\ -30 \\ \hline \end{array}$$

12)
$$\begin{array}{r} 47 \\ -36 \\ \hline \end{array}$$

13)
$$\begin{array}{r} 49 \\ -14 \\ \hline \end{array}$$

14)
$$\begin{array}{r} 85 \\ -14 \\ \hline \end{array}$$

15)
$$\begin{array}{r} 39 \\ -23 \\ \hline \end{array}$$

16)
$$\begin{array}{r} 99 \\ -53 \\ \hline \end{array}$$

17)
$$\begin{array}{r} 31 \\ -10 \\ \hline \end{array}$$

18)
$$\begin{array}{r} 44 \\ -22 \\ \hline \end{array}$$

19)
$$\begin{array}{r} 85 \\ -60 \\ \hline \end{array}$$

20)
$$\begin{array}{r} 77 \\ -66 \\ \hline \end{array}$$

21)
$$\begin{array}{r} 74 \\ -61 \\ \hline \end{array}$$

22)
$$\begin{array}{r} 28 \\ -16 \\ \hline \end{array}$$


23)
$$\begin{array}{r} 88 \\ -55 \\ \hline \end{array}$$

24)
$$\begin{array}{r} 66 \\ -52 \\ \hline \end{array}$$




GURU HAR RAI SCHOOL

FUN MATHS SUMMER ACTIVITIES LISTS



1. Bake a Math Pizza A
E

Measure ingredients for a pizza. Count the *toppings* in each slice!



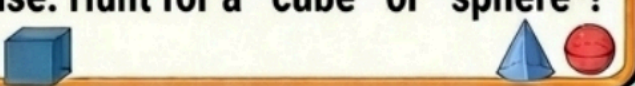
AA **2. Create a Coin Jar** A
E

I - Sort and count family *coins*
Learn their *prices* with fun tags!



3. Home Shapes Search I

I - Find 5 common 3D shapes in your house. Hunt for a *cube* or *sphere*!



4. Time and Games A
E

- Read times for activities.
Plan your play *time* in minutes!




U



5. Measure and Grow

Measure plant *height* in cm.
Chart their growth in a table!



**Have Fun
with Maths!**

**Subject:
Mathematics.
Grade: 2.
Summer Homework**

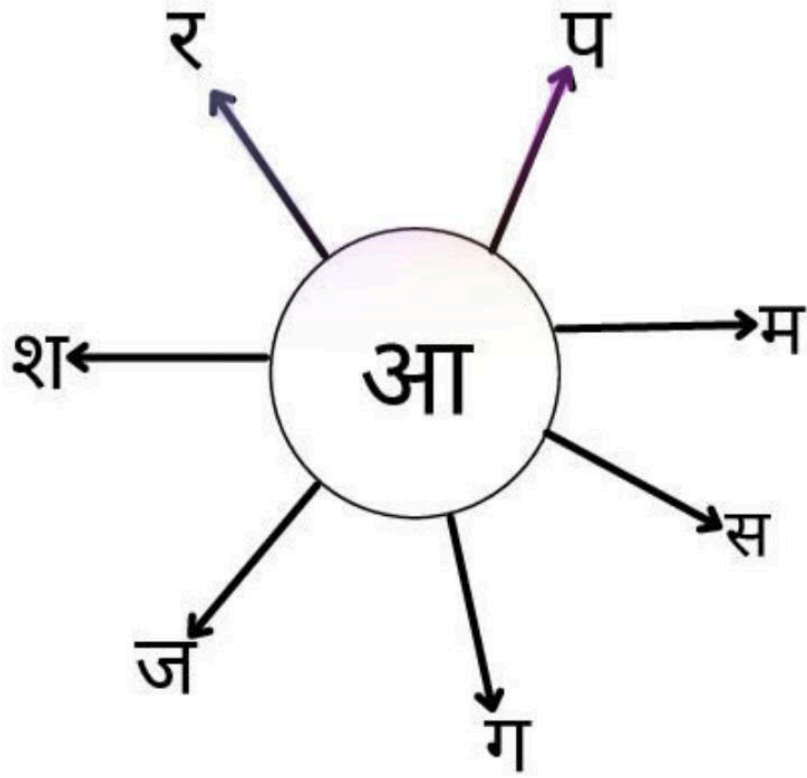


GURU HAR RAI SCHOOL

HINDI Holidays



अक्षर जोड़ कर शब्द बनाओ।



.....

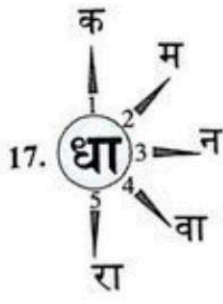
.....

.....

.....

.....

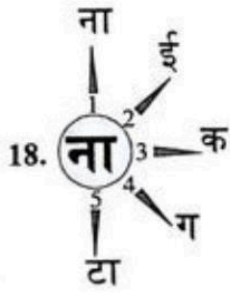
.....



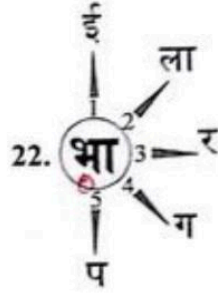
1. धाक
2. _____
3. _____
4. _____
5. _____



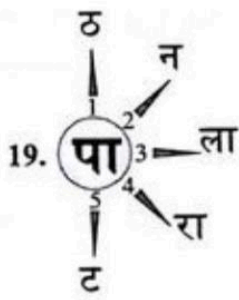
1. बाल
2. _____
3. _____
4. _____
5. _____



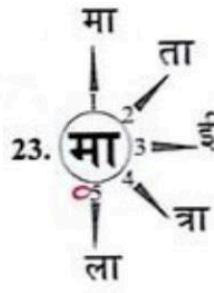
1. नाना
2. _____
3. _____
4. _____
5. _____



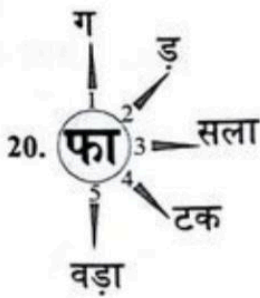
1. भाई
2. _____
3. _____
4. _____
5. _____



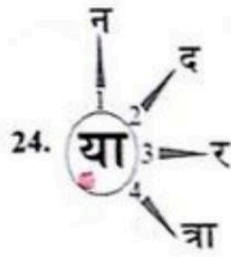
1. पाठ
2. _____
3. _____
4. _____
5. _____



1. मामा
2. _____
3. _____
4. _____
5. _____



1. फाग
2. _____
3. _____
4. _____
5. _____



1. यान
2. _____
3. _____
4. _____

एकवचन - बहुवचन

सही वचन से खाली स्थान भरो।

1. मैंने एक _____ (फूल / फूलों) को देखा।
 2. बच्चे _____ (पुस्तक / पुस्तकें) पढ़ रहे हैं।
 3. बगीचे में कई _____ (पक्षी / पक्षी) उड़ रहे हैं।
 4. माँ ने एक _____ (रोटी / रोटियाँ) बनाई।
 5. मेरे पास दो _____ (कुर्सी / कुर्सियाँ) हैं।
 6. मेरे पास दो _____ (कुर्सी / कुर्सियाँ) हैं।
 7. मेले में बहुत _____ (दुकान / दुकानें) हैं।
 8. मेरे पास एक _____ (गाड़ी / गाड़ीयाँ) हैं।
 9. हम रोज _____ (आम / आमों) हैं।
 10. डिब्बे में बहुत से _____ (लड्डू / लड्डुओं) हैं।
-

शब्द बनाओ -

क	ख	ग	घ	च	छ	ज	झ	ट	ठ	ड
1	2	3	4	5	6	7	8	9	10	11
ढ	त	थ	द	ध	न	प	फ	ब	भ	म
12	13	14	15	16	17	18	19	20	21	22
य	र	ल	व	श	ष	स	ह	ढ़	ड़	
23	24	25	26	27	28	29	30	31	32	

ज	ग
7	3

4	24
---	----

29	32	1
----	----	---

19	25
----	----

20	24	3	15
----	----	---	----

2	24	25
---	----	----

17	23	17
----	----	----

विलोम (विपरीत) शब्द

विपरीत शब्द लिखो।

छोटा	X	_____
दूर	X	_____
नरम	X	_____
सीधा	X	_____
इधर	X	_____
रात	X	_____
सुबह	X	_____

विपरीत शब्द पर गोला लगाओ।

रात - सुबह शाम दिन कल

नरम - गरम शर्म ठंडा धुप

छोटा - बड़ा खोटा मोटा सीधा

ठंडा - गरम नरम पीला गोरा

मोटा - छोटा पतला हल्का भरी

शब्द भेद

नीचे दिए गए बॉक्स से शब्द चुनकर सही स्थान पर लिखो।

संज्ञा	क्रिया	विशेषण	क्रिया विशेषण

तारें	टीवी	शांत	खुश	शिक्षक
दौड़ना	राम	सोचना	दोस्त	मदद
फल	कम्प्यूटर	छोटा	खुशी	जल्दी से
गुलाबी	नाचना	पीना	सुंदर	अद्भुत
दुःखी	समझदार	किताब	कूदना	जोर से

व्याकरण - गिनती

चौदह, बाईस, पच्चीस, इक्कीस, सत्ताईस,
सताइस, पन्द्रह, उनतीस, उन्नतीस
अठारह, उन्नीस, बारह, अठाईस, सत्रह,
नौ, छह, छः, ग्यारह, ग्यारह

प्रश्न- नीचे दिए गए खाली स्थानों पर सही गिनती चुनकर लगाएँ ।

14

27

22

11

25

19

21

18

29

12

9

28

6

17



GURU HAR RAI SCHOOL

FUN HINDI SUMMER ACTIVITIES LISTS



1. Hindi Kitchen Magic आ


अ से आम (A se Aam):
Make Mango Shake.



अ


2. Ghar ka Naya Naam

Create Hindi names for rooms. e.g., 'रसोईघर' (Rasoi Ghar - Kitchen).



3. Hindi Kahanikar

Act out a small story like 'The Thirsty Crow' (प्यासा कौआ).



4. Hindi Word Detective

Find Hindi words on snack packets.



5. Prakriti aur Shabd

Plant seeds and learn names of plants (पौधा, फूल).



Have Fun
with Hindi!

विषय: हिंदी
कक्षा: २
गीष्मकालीन गृहकार्य



Class 2

**COMPUTER
HOLIDAY
HOMEWORK**



Fill in the boxes with the letters " I , P and O " .

I - Input | **P-Process** | **O -Output**

Teacher remarks




Making Orange Juice

		
<input type="text"/>	<input type="text"/>	<input type="text"/>

Making Birthday cake

		
<input type="text"/>	<input type="text"/>	<input type="text"/>

Making clay model

		
<input type="text"/>	<input type="text"/>	<input type="text"/>

Adding two numbers

$15 + 25 =$	15 and 25	Sum = 40
<input type="text"/>	<input type="text"/>	<input type="text"/>

When you do some works on the computer ...

		
<input type="text"/>	<input type="text"/>	<input type="text"/>

4. Match the following.

a. I display things.




b. I type text.



c. I draw picture.



d. I play music.



e. I print on paper.

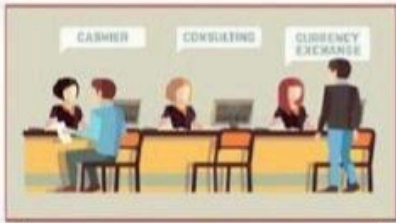


f. I find sum.

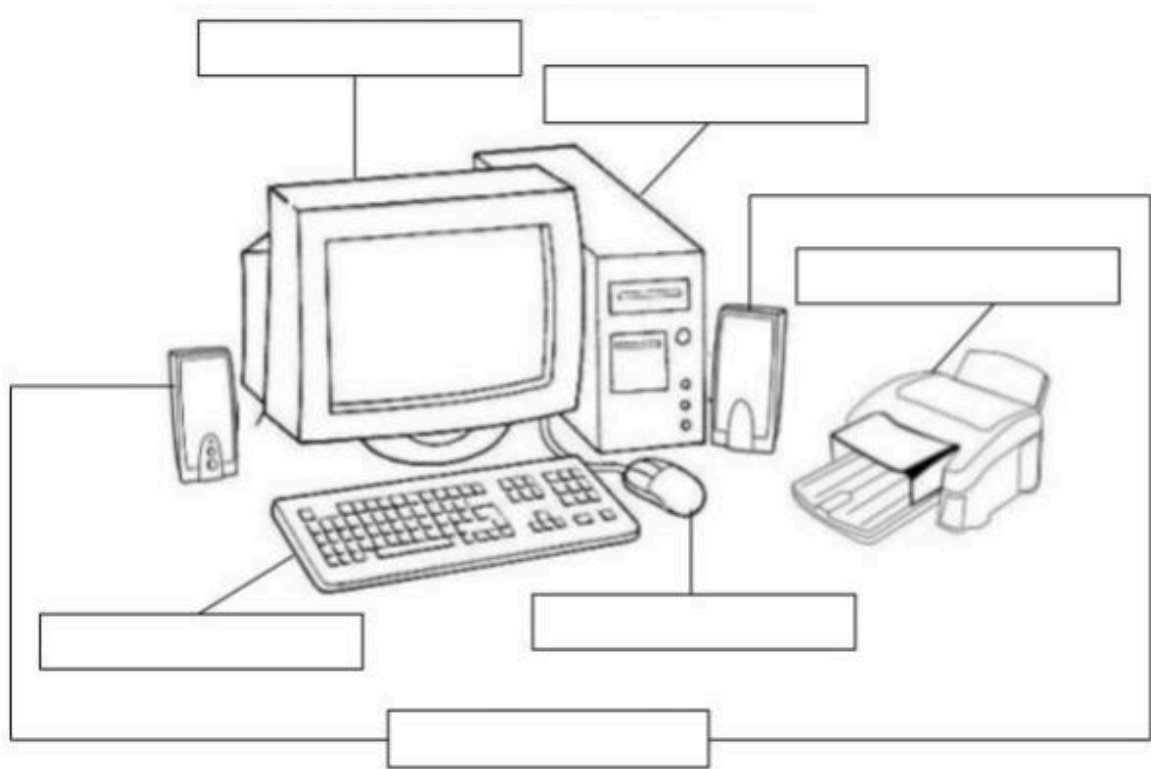


Different places where Computer are Used.

Supermarkets Airport Offices School
Hospital Banks Home Making films



Labelled the diagram



Identify which one is Software or Hardware:




SOFTWARE

HARDWARE

NOTICE

Dear Parents,



Summer Holiday Homework has been provided to all students. Parents may complete the homework according to their convenience by either taking **printouts of the given pages** or by purchasing a **₹20 notebook** and helping their child complete the work neatly in it.



Kindly ensure that the completed holiday homework is submitted on **7th July 2026.**

Thank you for your continuous cooperation and support. 